




TOM NEWBY SCHOOL
TERM 2 CONTROLLED TEST

| | | | |
|--|------------------|--------------------|-----------------------------|
| Subject | Geography | Examiner | Miss Miller |
| Date | June | Total marks | 25 |
| Session | | Duration | 1 Hour |
| Grade | 4 | Moderator | Miss van Coppenhagen |
| Special instructions/ Equipment | | | |
| <p>This assessment has been compiled using notes and information contained in the Tom Newby School resource material. The marking memorandum has been compiled accordingly. While alternative responses will be given due acknowledgement, the official memorandum will be considered a priority document to ensure uniformity of marking.</p> | | | |

| | | |
|--------------|-----------------|---------------|
| Name: | Surname: | Class: |
|--------------|-----------------|---------------|

| Question 1 | Question 2 | Question 3 | Question 4 | Question 5 | Question 6 | Total |
|------------|------------|------------|------------|------------|------------|--------------|
| 3 | 7 | 4 | 3 | 5 | 3 | 25 |
| | | | | | | |



| | | |
|-------------------|--------------------|-------------|
| Section A: | Settlements | [10] |
|-------------------|--------------------|-------------|

Question 1

[3]

Label the pictures of each settlement correctly.

1.1



(1)

1.2



(1)

1.3



(1)

Question 2

[7]

Use full sentences to explain the following terms.

2.1 Population density

(1)

2.2 Service Jobs

(1)

2.3 Landmark





(1)

3. Name two basic human needs. (2)

4. In your opinion, why is living in an overcrowded settlement not safe? (2)

Section B:
Mapwork
[15]
Question 3
[4]

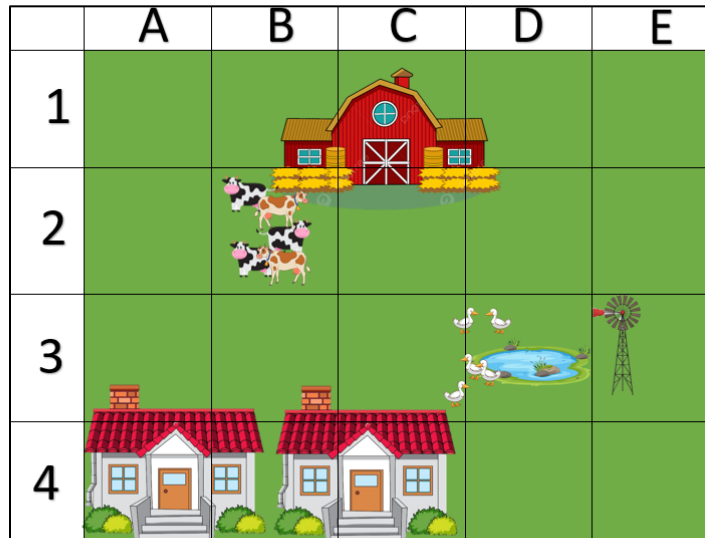
Match the words in column B with the correct symbol in column A. Write the letter in the answer grid provided.

| Column A | | Column B | |
|----------|---|----------|----------|
| 3.1 |  | A | Mosque |
| 3.2 |  | B | Bus stop |
| 3.3 |  | C | Hospital |
| 3.4 |  | D | Library |

| 3.1 | 3.2 | 3.3 | 3.4 |
|-----|-----|-----|-----|
| | | | |

Question 4**[3]**

Look at the map below and give the grid references for the following:



4.1 Cow: _____ (1)

4.2 Dam: _____ (1)

4.3 Wind pump: _____ (1)

Question 5**[5]**

Answer the following questions in full sentences.

5.1 What is a coastline? (1)

5.2 Name two of the three capital cities in South Africa. (2)

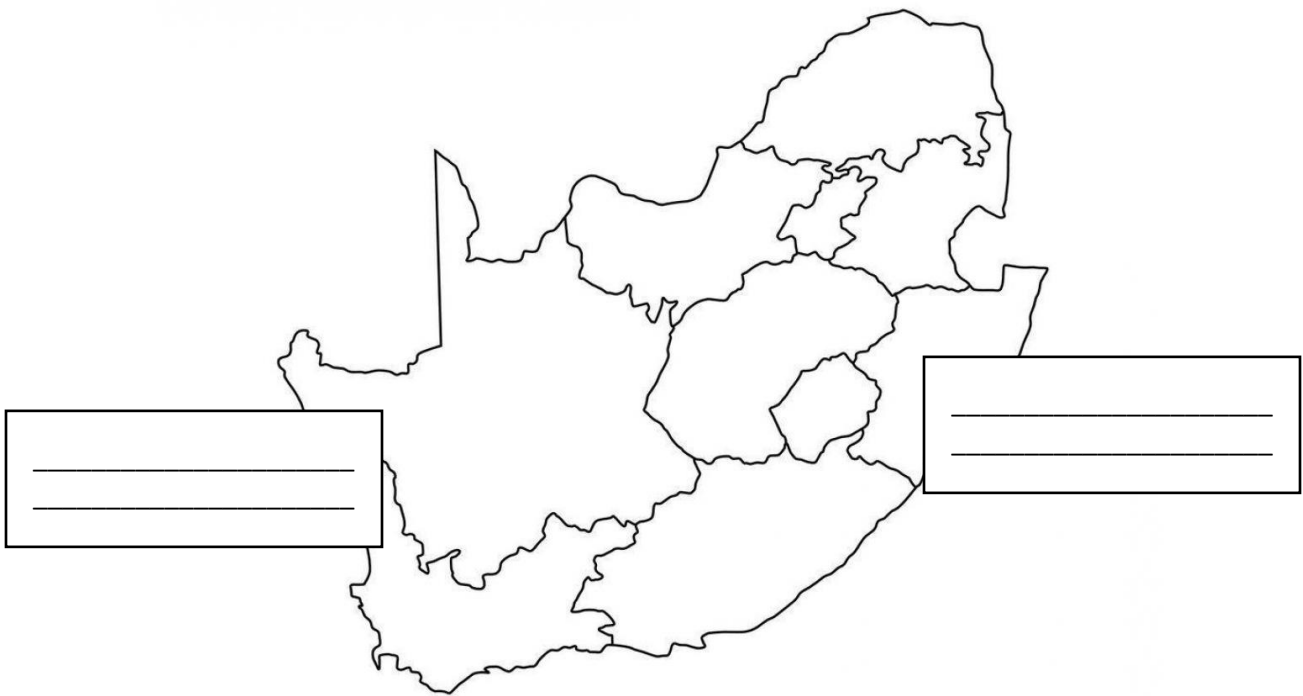
5.3 Which is the largest continent in the world? (1)

5.4 Which is the smallest continent in the world? (1)

Question 6**(3)**

Use Map A to complete the following instructions:

- 6.1 Colour the province you live in, in red. (1)
- 6.2 Label the Atlantic Ocean in the correct block provided on Map A. (1)
- 6.3 Label the Indian Ocean in the correct block provided on Map A. (1)

Map A

**THE
END**

Grade 4 Geography
Term 2 Formal Assessment
Performance Analysis June 2024
 (For teacher use only)

Name and Surname: _____ **Class:** _____

For teacher use only:

| Question | 1 | 2 | 3 | 4 | 5 | 6 |
|-----------------------|----------|----------|----------|----------|----------|----------|
| Possible mark | 3 | 7 | 4 | 3 | 5 | 3 |
| Learner's mark | | | | | | |
| Moderated mark | | | | | | |

| | |
|------------------------|-----------|
| Possible total | 25 |
| Learner's total | |
| Moderated total | |