


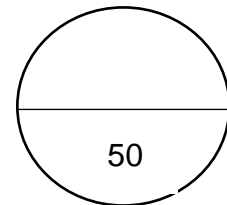


TOM NEWBY SCHOOL
TERM 4 FORMAL ASSESSMENT

Subject	Geography	Examiner	Miss M. Miller
Date	November 2022	Total marks	50 marks
Grade	7	Duration	1 hour
		Moderator	Mrs M. Steyn
Special instructions/ Equipment	<ol style="list-style-type: none">1. Read the questions carefully before answering.2. Take note of the mark allocation and answer accordingly.3. Work neatly.4. Think carefully.5. Take a deep breath, relax and good luck!		
<p>This assessment has been compiled using notes and information contained in the Tom Newby School resource material. The marking memorandum has been compiled accordingly. While alternative responses will be given due acknowledgement, the official memorandum will be considered a priority document to ensure uniformity of marking.</p>			
Name:	Surname:	Class:	

Instructions:

1. This paper consists of 7 questions.
2. There are a total of 9 pages.
3. Section A: Population (25)
4. Section B: Natural resources (25)



Section A:	Population growth and change	[25]
-------------------	-------------------------------------	-------------

Question 1

[7]

Match column B to column A and write the correct letter in the answer grid below

Column A	Column B
1.1 Smallpox	A. 1713, Ship in Cape Town
1.2 Bubonic plaque	B. I am because of who we are
1.3 Edward Jenner	C. Full of people
1.4 Modern tradition	D. Bleeding internally
1.5 Ubuntu	E. Small family for a better life
1.6 Populous	F. Smallpox vaccine
1.7 May 2018	G. Population reached 7.7 billion people
	H. Pasteurisation

Answer grid:

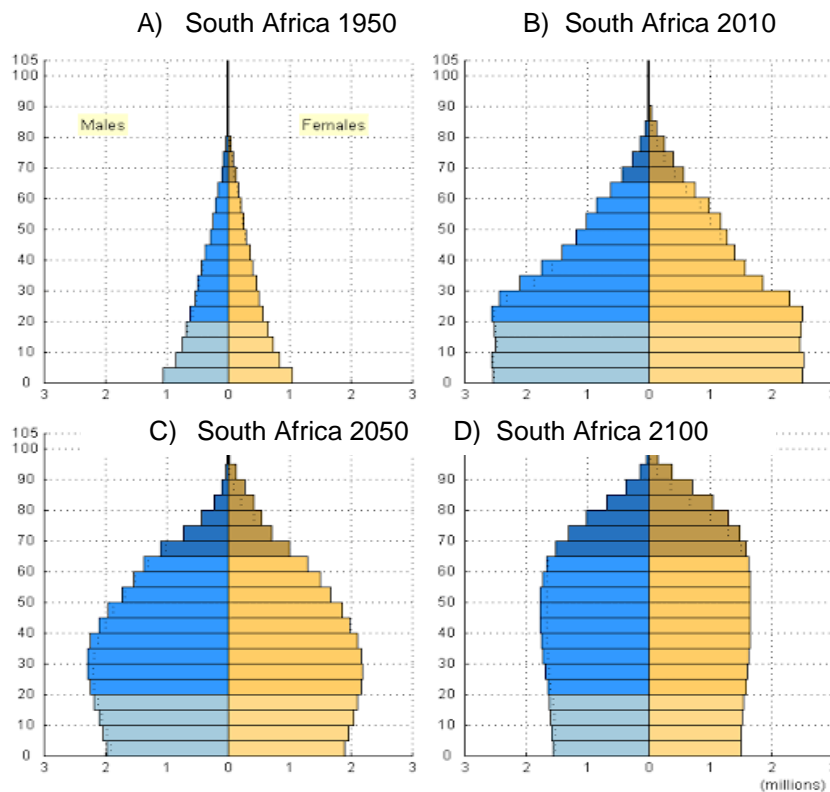
1.1	1.2	1.3	1.4	1.5	1.6	1.7

Question 2

[9]

Use figure 1 to answer the questions.

Figure 1



2.1 Describe what happened to the population from 1950-2010. (1)

2.2 What is expected to happen to the population over time? (1)

2.3 Has the life expectancy changed from 1950 – 2100? (1)

2.4 What gender generally lives longer in South Africa? (1)

2.5 What is the difference between the number of infants in 2010 to 2050? (2)

(Show working out)

2.6 Name 3 ways to prevent disease by cleanliness. (3)

Question 3 (4)

Define the following terms:

3.1 Cholera: (1)

3.2 Parasite: (1)

3.3 The Black death: (1)

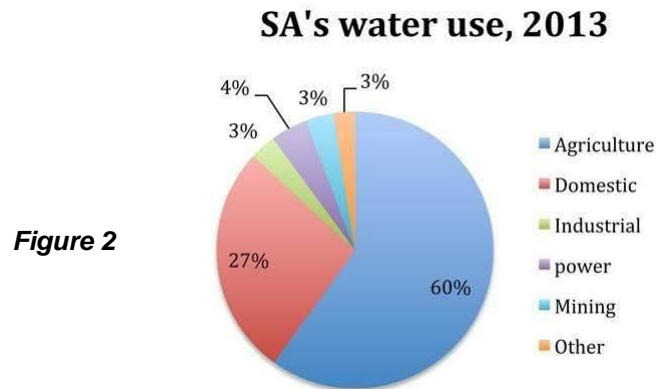
Section B:

Natural resources

[25]

Question 5**[8]**

Use figure 2 to help you answer the questions below.



5.1 Look at South Africa's water usage in 2013 and choose the correct answers. Place the correct letter in the blocks provided.

5.1.1 South Africa uses more water for power than for _____. (1)

A. Domestic

B. Agriculture

C. Mining

5.1.2 People use water in agriculture to _____. (1)

A. Water crops

B. Keep fish

C. Power generation

5.1.3 Water is a _____ resource. (1)

A. Common


B. Scarce

5.1.4 Ways to reduce the usage of water is to _____. (1)

A. Have smaller catchment areas

B. Improve farming methods

C. Reduce wetlands



5.2 What percentage of water is used for mining? (1)

5.3 What percentage of water is used for Domestic? (1)

5.4 What is the difference between the highest percentage and the lowest percentage? (2)

(Show working out)

Question 6:

[12]

Use figure 3 to help you answer the questions.

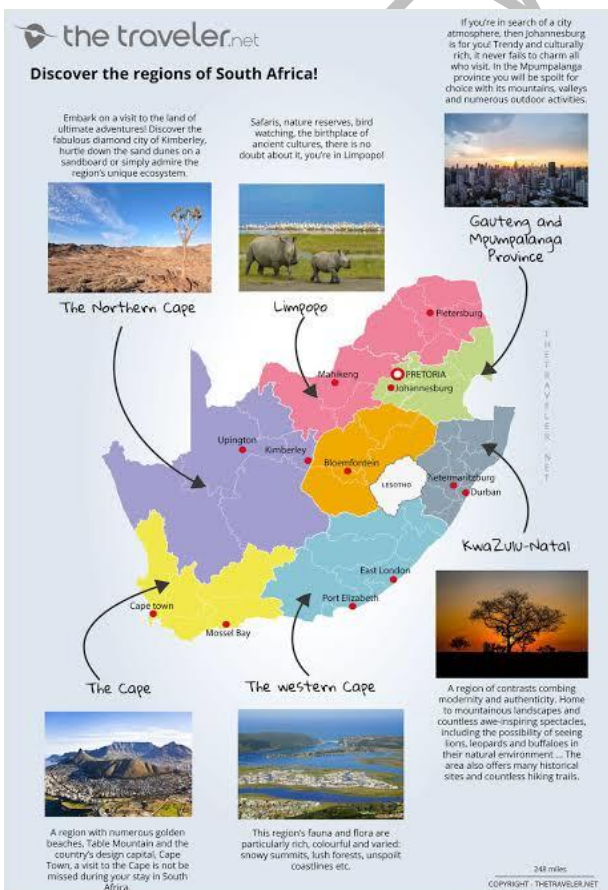


Figure 3

6.1 What is eco-tourism? (1)

6.2 Give 4 examples of eco-tourism activities. (4)

6.3 Does South Africa have good resources for eco-tourism? Explain (2)

6.4 Name 5 natural resources that South Africa is rich in. (5)

Question 7

[5]

Write a paragraph about the abuse of resources. Mention three ways in which people are destroying the worlds natural resources and two ways to reduce this abuse.

Use the rubric below as a guideline.

Level	Description	Marks
1	Uses evidence partially with little to no understanding with partial or no relevance to the topic.	0-1
2	Uses evidence in a basic understanding to a great extent to the topic with no further explanation.	2-3
3	Uses sufficient and relevant evidence effectively which shows great understanding of the topic given.	4-5

Grade 7 Geography
TERM 4 FORMAL ASSESSMENT
Performance analysis

Name: _____ Class: _____

For teacher use only:

	SECTION A				SECTION B		
Question	1	2	3	4	5	6	7
Possible mark	7	9	4	5	8	12	5
Learner's mark							
Moderated mark							

Possible total	50
Learner's total	
Moderated total	