



TOM NEWBY SCHOOL EXAMINATION



1

Subject	CREATIVE ART: VISUAL ART	Examiner	MRS M GOUGH
Date	JUNE 2022	Total marks	50
Grade	7	Duration	2 HOURS
		Moderator	MRS A SINGH
Special instructions/ Equipment	Stationery required: A pen and a pencil. No sharing of stationery is allowed.		
This assessment has been compiled using notes and information contained in the Tom Newby School resource material. The marking memorandum has been compiled accordingly. While alternative responses will be given due acknowledgement, the official memorandum will be considered a priority document to ensure uniformity of marking.			

Name:	Surname:	Class:
-------	----------	--------

ART MARK: _____ /50

Instructions:

1. Write your name, surname and class on the paper.
2. This paper is made up of two sections:
Section A: Visual Art (50 marks)
Section B: Music (50 marks)
3. Read through and follow all of the instructions carefully.
4. **Answer all questions on the question paper.**
5. Please write neatly and try to answer all of the questions to the best of your ability.



SECTION A: ART (50 MARKS)

Question 1: True or False

(5)

State whether the following statements are True or False.

1.1 Complementary colours are opposite each other on the colour wheel.

1.2 Monochromatic colours are tinted colours.

1.3 A hue is a tinted colour.

1.4 Value is the lightness and darkness of a colour.

1.5 Texture is a design principal.

Question 2: Fill in the missing words

(5)

Choose a word from the word bank and write it in the spaces below.

2.1 An artwork can be _____ where both sides are the same.

2.2 _____ is the lightness or darkness of a colour.

2.3 _____ is the distance between and within the image of a picture.

2.4 Rhythm is created when you _____ art elements.

2.5 _____ is when you analyze a painting or drawing.

Question 3: Multiple Choice - Comics through the Ages

Underline only one answer option for each question.

(5)

3.1 The Golden Age of comic books is between

- a) 1928 - 1950
- b) 1938 - 1560
- c) 1948 - 1950
- d) 1958 - 1950

3.2 The Silver Age of comic books is between

- a) 1940 - 1971
- b) 1950 - 1971
- c) 1960 - 1971

d) 1970 - 1971

3.3 The Bronze Age of comic books is between

- a) 1941 - 1980
- b) 1951 - 1980
- c) 1961 - 1980
- d) 1971 - 1980

3.4 The Dark Age of comic books is between

- a) 1980 - 1993
- b) 1990 - 1993
- c) 1970 - 1993
- d) 1960 - 1993

3.5 The Ageless Age of comic books is between

- a) 1993 - Present day
- b) 1994 - Present day
- c) 1995 - Present day
- d) 1996 - Present day

Question 4: Art elements and Design principles

(15)

Give the definition of the design principles below and explain how it has been used in the picture.

4.1 Emphasis

(3)




4.2 Proportion

(3)




4.3 Contrast

(3)



4.4 Rhythm

(3)




4.5 Balance



(3)

Question 5: Answer the questions below about Jack Kirby.

(5)



5.1 What type of artist was Jack Kirby? (1)

5.2 Who helped Kirby to create the Marvel superheroes? (1)

5.3 Name 1 Marvel superhero that was created by Lee and Kirby. (1)


5.4 Which themes are portrayed in Jack Kirby's comic book art? (2)


Question 6: Craftwork (5)

In a paragraph, explain what Craftsmanship is and why it is so important for the people of South Africa. Write 5 points.

Question 7: Create using the art elements (10)

Draw the still life image below, using the various art elements.





RUBRIC FOR STILL LIFE DRAWING

CRITERIA	MARKS 10	MARKS 8 - 9	MARKS 7	MARKS 5 - 6	MARKS 0 - 4
USE OF ART ELEMENTS IN DESIGN	Excellent design of the still life, which incorporates all the art elements and the entire design is done perfectly.	Very good design of the still life, which incorporates all the art elements.	Good design of the still life, which incorporates most of the art elements.	Satisfactory design of the still life, which incorporates only a few of the art elements.	Elementary design of the still life, which incorporates only 1 or 2 of the art elements.
TOTAL: 10 MARKS					

TOTAL SECTION A = 50 MARKS
Grade 7 Visual Art Exam June 2022
Performance Analysis
(For teacher use only)

Name and Surname: _____ **Class:** _____

Question	1	2	3	4	5	6	7
Possible Mark	5	5	5	10	10	5	10
Learner Mark							

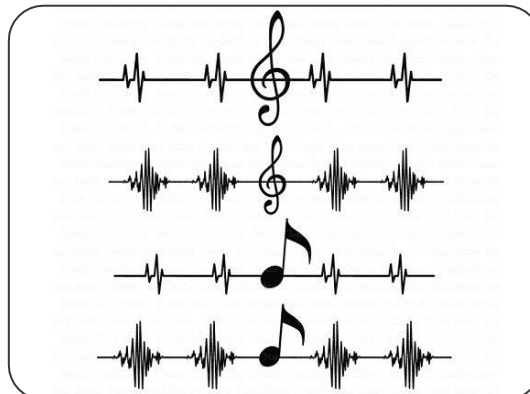
**TOM NEWBY SCHOOL EXAMINATION**

Subject	CREATIVE ARTS: MUSIC	Examiner	MRS C THERON
Date	JUNE 2022	Total marks	50
Grade	7	Duration	2 HOURS
		Moderator	MRS A SINGH
Special instructions/ Equipment			
This assessment has been compiled using notes and information contained in the Tom Newby School resource material. The marking memorandum has been compiled accordingly. While alternative responses will be given due acknowledgement, the official memorandum will be considered a priority document to ensure uniformity of marking.			

Name:	Surname:	Class:
--------------	-----------------	---------------

MUSIC MARK: _____ /50**Instructions:**

1. Write your name, surname, and class on the paper.
2. This paper is made up of two sections:
Section A: Visual Art (50 marks)
Section B: Music (50 marks)
3. Read through and follow all the instructions carefully.
4. **Answer all questions on the question paper.**
5. Please write neatly and try to answer all the questions to the best of your ability.




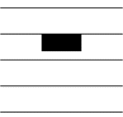



SECTION B: MUSIC (50 MARKS)

Question 1:

Match the music notation in Column A, to its name in Column B. Circle the correct letter

Column B.


(5)


Column A	Column B
1.1 	a) Treble clef b) Bass clef c) Time signature
1.2 	a) Minim rest/Half rest b) Crotchet rest/Quarter rest c) Semi-breve rest/Whole rest
1.3 	a) Semi-breve rest/Whole rest b) Minim rest/Half rest c) Crotchet rest/Quarter rest
1.4 	a) Minim/Half note b) Crotchet/Quarter note c) Quaver/Eighth note
1.5 	a) Minim/Half note b) Semi-breve/Whole note c) Quaver/Eighth note

Question 2:

State whether the following is True or False.





(2)

2.1  This note's letter name is "G" _____

2.2  This note's letter name is "A" _____

Question 3:

Name the instruments below and state to which family of instruments each instrument belongs. (8)

	Name of Instrument	Name of Family
3.1 		
3.2 		
3.3 		
3.4 		

Question 4:

(10)

Explain the meaning of the following musical terms:

4.1 Ghosting

(2)

4.2 Pop Music

(2)

4.3 Scale

(2)

4.4 Lyrics

(2)


4.5 Dynamics

(2)


Question 5:


(10)


Complete each music bar below. Draw the correct music notation, notes and rests. The music notation can be drawn on any line or space, as long as it is inside the bar/measure. Please note that the position of the rest is important. A minimum of 5 rests must be indicated in this question.

5.1 

5.2 

5.3 

5.4 

5.5 

Question 6:

(5)

6.1 In your own words, describe how a guitar is played. Write about at least 5 main execution points. (Hint: body position, hand position, movement, etc.)

6.2 Describe, in your own words, how sound is created when you play a Brass instrument.

(5)

Question 7:

Using only the given notes, create your own rhythm on the line provided below. (5)



A horizontal line with a vertical bar at the left end and a double vertical bar at the right end, indicating a space for creating a rhythm.

TOTAL SECTION B = 50 MARKS**Grade 7 Music Exam June 2022****Performance Analysis**

(For teacher use only)

Name and Surname: _____ Class: _____

Question	1	2	3	4	5	6	7
Possible Mark	5	2	8	10	10	10	5
Learner Mark							