



TOM NEWBY SCHOOL EXAMINATION



Subject	CREATIVE ART: VISUAL ART	Examiner	MISS L CHITIMBE
Date	JUNE 2021	Total marks	50
Grade	7	Duration	2 HOURS
		Moderator	MRS A SINGH
Special instructions/ Equipment	Pen, pencil, colouring pencils.		
This assessment has been compiled using notes and information contained in the Tom Newby School resource material. The marking memorandum has been compiled accordingly. While alternative responses will be given due acknowledgement, the official memorandum will be considered a priority document to ensure uniformity of marking.			

Name:	Surname:	Class:
--------------	-----------------	---------------

ART MARK: _____ /50

Instructions:

1. Write your name, surname and class on the paper.
2. This paper is made up of two sections:
Section A: Visual Art (50 marks)
Section B: Music (50 marks)
3. Read through and follow all of the instructions carefully.
4. Answer all questions on the question paper.
5. Please write neatly and try to answer all of the questions to the best of your ability.



SECTION A: ART (50 MARKS)**Question 1: True or False****[10]**

State whether the following statements are True or False. If False, correct the statement.

1.1 There are 10 Art elements.

1.2 There are 6 basic Design principles.

1.3 The Primary colours are green, purple and orange.

1.4 Art Mediums are numbers.

1.5 Line is an example of an Art element.

1.6 Texture is a continuous mark on a page or any other surface.

Question 2: Fill in the missing words to complete each sentence below.**[5]**

2.1 A tint is when you add _____ to a colour.

2.2 A tone is when you add _____ to a colour.

2.3 A _____ is the name of a colour.

2.4 _____ refers to the brightness or dullness of a colour.

2.5 _____ is the lightness and darkness of a colour.

Question 3: Art Elements and Design Principles

[10]

Analyze the pictures below and discuss how each concept is portrayed in that picture.

3.1 Emphasis

(3)



3.2 Proportion

(3)



3.3 Variety

(2)



3.4 Rhythm

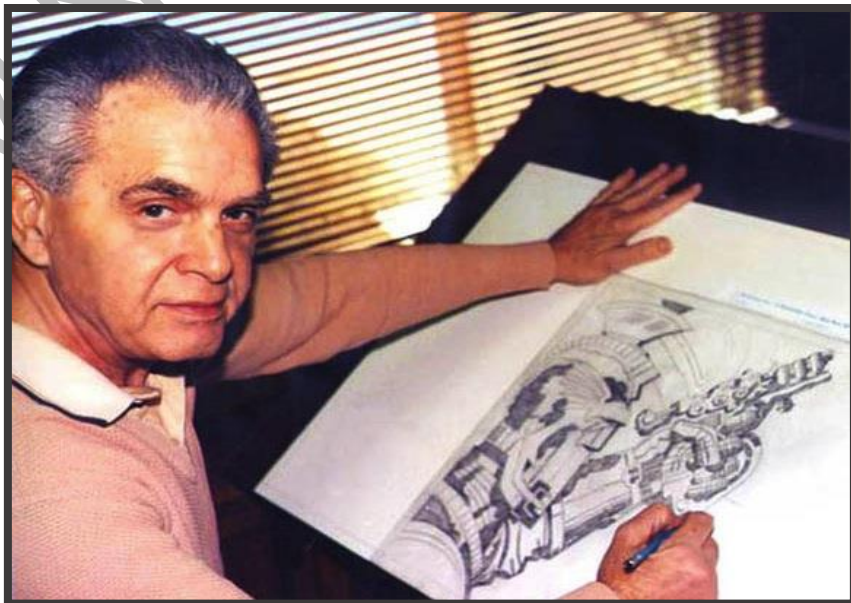
(2)



Question 4: Comics through the ages**[10]**

4.1 Which age came to life between the year 1938-1950 and what is it characterized by? (3)

4.2 Answer the questions below about Jack Kirby.



a) When and where was Jack Kirby born? (2)

b) What profession is he famously known for? (1)

c) Jack Kirby as a major innovator, creator and the face of Marvel. What role did he play in being an influence in the society we live in today? (1)

d) Except for Captain America name one of the comics that he has worked on over the years. (1)

e) Name 2 themes that he focused on during his work? (2)

Question 5: Working in series [5]


5.1 What is series? (2)

5.2 What should an Art critique look for in a series picture? (3)

Question 6: Create using art elements

[10]

Design an image of a forest using the art elements and briefly explain how you have used these elements in the drawing.



TOTAL SECTION A = 50 MARKS
Grade 7 Visual Art Exam June 2021
Performance Analysis
(For teacher use only)

Name and Surname: _____ **Class:** _____

Question	1	2	3	4	5	6
Possible Mark	10	5	10	10	5	10
Learner Mark						



TOM NEWBY SCHOOL EXAMINATION



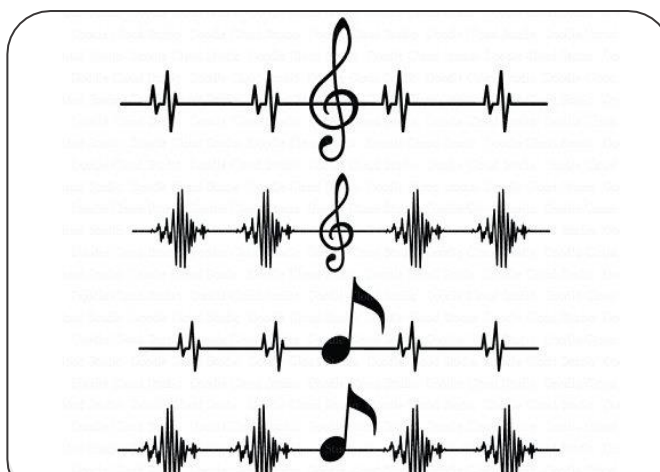
Subject	CREATIVE ARTS: MUSIC	Examiner	MRS R VISSER
Date	JUNE 2021	Total marks	50
Grade	7	Duration	2 HOURS
		Moderator	MRS A SINGH
Special instructions/ Equipment			
This assessment has been compiled using notes and information contained in the Tom Newby School resource material. The marking memorandum has been compiled accordingly. While alternative responses will be given due acknowledgement, the official memorandum will be considered a priority document to ensure uniformity of marking.			

Name:	Surname:	Class:
--------------	-----------------	---------------

MUSIC MARK: _____ /50

Instructions:

1. Write your name, surname and class on the paper.
2. This paper is made up of two sections:
Section A: Visual Art (50 marks)
Section B: Music (50 marks)
3. Read through and follow all of the instructions carefully.
4. Answer all questions on the question paper.
5. Please write neatly and try to answer all of the questions to the best of your ability.








TOM NEWBY SCHOOL



SECTION: MUSIC (50 MARKS)

Question 1:**(5)**

Name the note and rest values of the following notes/rests:


1.1  _____1.2  _____1.3  _____1.4  _____1.5  _____**Question 2:****(5)**


How many counts are the following notes and rests?

2.1  _____2.2  _____2.3  _____2.4  _____2.5  _____


Question 3:**(10)**


Complete each music bar below, by drawing the correct music notation inside the music bar/measure. The music notation can be drawn on any line or space, as long as it is inside the bar/measure.

3.1 

3.6 


3.2 


3.7 

3.3 

3.8 

3.4 

3.9 

3.5 

3.10 

Question 4:**(10)**

Give the definition of the following musical elements:

4.1 Tempo:

(2)

4.2 Mood in music:

(2)

4.3 Dynamics:

(2)

4.4 Metre:

(2)

4.5 Scale:

(2)

Question 5:**(10)**

5.1 Name the instruments below and state which genre of music you will associate each instrument with.

	Name of instrument	Genre
a) 		
b) 		
c) 		
d) 		
e) 		

Question 6: **(5)**

6.1 In your own words, describe how a violin is played. Write about at least 5 main execution points. (Hint: body position, hand position, movement, etc.)

6.2 Describe, in your own words, how sound is created when you play a woodwind instrument. **(5)**

TOTAL SECTION B = 50 MARKS

Grade 7 Music Exam June 2021
Performance Analysis
(For teacher use only)

Name and Surname: _____ **Class:** _____

Question	1	2	3	4	5	6
Possible Mark	5	5	10	10	10	10
Learner Mark						

TOM NEWBY SCHOOL