



TOM NEWBY SCHOOL
TERM 4 - Test



1

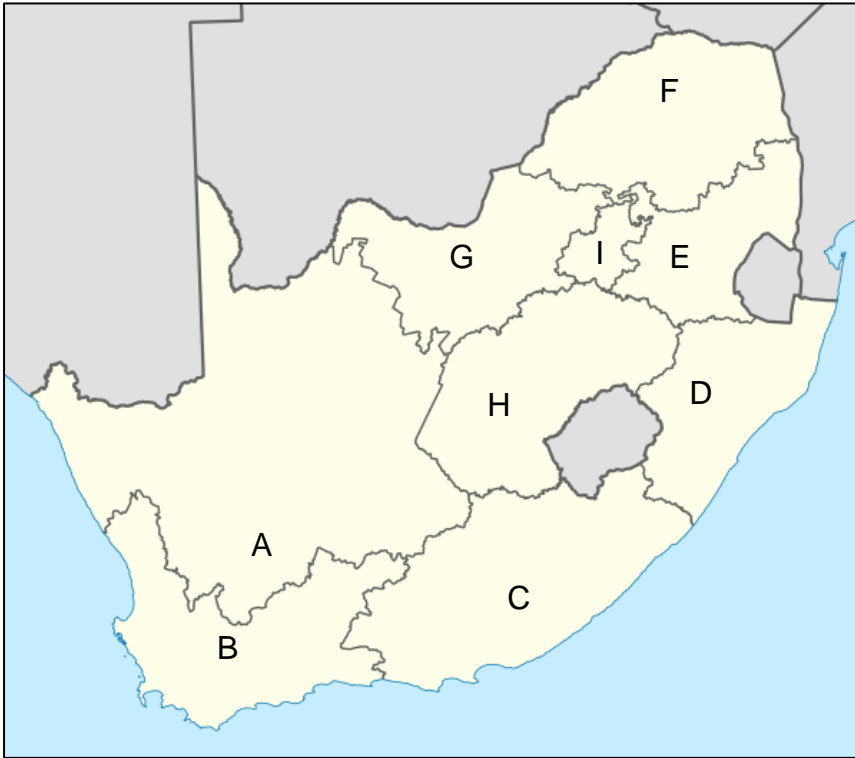
Subject	Geography	Examiner	Miss Ratering
Date	November 2021	Total marks	40 marks
Grade	6	Duration	1 hour
		Moderator	Miss Botha
Special instructions/ Equipment	Write as many details as possible. Read and answer ALL questions thoroughly. Write neatly and legibly in blue pen. Good luck! Think before you INK! Write all answers on the question sheet.		
<p>This assessment has been compiled using notes and information contained in the Tom Newby School resource material. The marking memorandum has been compiled accordingly. While alternative responses will be given due acknowledgement, the official memorandum will be considered a priority document to ensure uniformity of marking.</p>			

Instructions:

1. This paper consists of 4 questions.
2. Answer all the questions on the question sheet.
3. Take note of the mark allocation per question.
4. Read carefully and answer all the questions neatly and legibly.

Question 1**[11]**

Refer to this map of South Africa and answer the questions that follow.



1.1 Name the provinces of South Africa labelled B, D and I on the map.

B: _____

D: _____

I: _____ (3)

1.2 a) Which province is most densely populated? _____ (1)

b) Why is the province in 1.2a the most populated one? _____

_____ (1)

1.3 Give 2 reasons (other than the answer given in 1.2b) why people choose to live in densely populated areas.

 _____ (2)

1.4 a) Which province is the most sparsely populated? _____ (1)

b) Explain why this is so. _____

_____ (1)

1.5 Give 2 reasons (other than the answer given in 1.4b) why people don't live in sparsely populated areas.

_____ (2)

Question 2

[8]

Write the phrases below into the spaces in the table.

- More work. Little work. Polluted air. Constant noise.
 Light traffic. Little noise. Choice of schools. No public transport.

Example: clean air is an advantage and is typical of rural areas.

Reside in Rural Area:	Reside in Urban Area:
Advantage E.g. Clean air _____ _____	Advantage _____ _____
Disadvantage _____ _____	Disadvantage _____ _____

Question 3

[16]

Fill in a word on each line that will make the sentence correct.

3.1 There seems to be a link between where people live and climate. Most people choose a climate that is _____ without too much _____. They avoid climates with extreme _____ and _____. (4)

3.2 Name the 3 climate zones of the earth. (3)

3.2.1 _____

3.2.2. _____

3.2.3 _____

3.3 a. In which climate zone do most people live? _____ (1)

b. Give 2 features of this zone. _____

_____ (2)

3.4 Which climate zone has the harshest climate? (Be very specific.) _____
 _____(2)

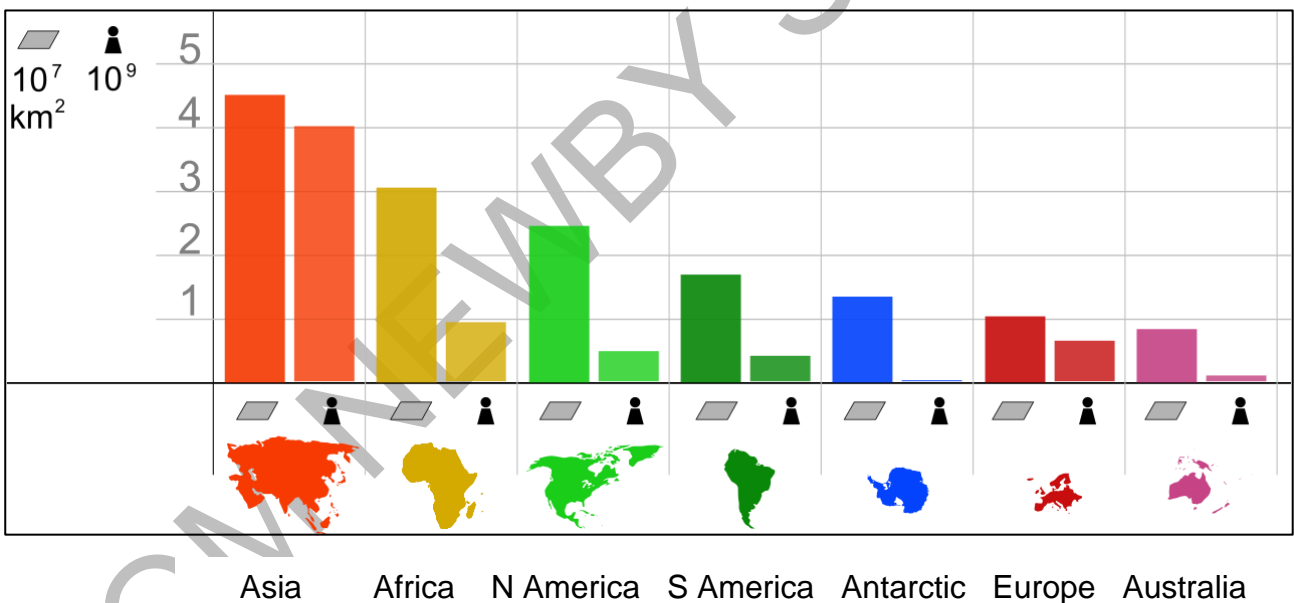
3.4.1 Briefly describe the climate here. _____
 _____(2)


3.5 In which climate zone would you prefer to live? Explain your choice. _____
 _____(2)

Question 4

[5]

Paragraph writing. Refer to the bar graph and write a short paragraph about the world's population. Answering the questions will help you to include the necessary information in your paragraph.



Remember:  shows the land area and the little man shows population numbers.

Introduction:

In which hemisphere do most people live? Why do most people live in this hemisphere?

Body:

Which continent has the highest population?

Which continent has the next highest population count?

Which continent has the biggest land area?

Grade 6 Geography Test
November 2021
Performance Analysis

Name: _____ Class: _____

For teacher use only:

Question	1	2	3	4
Possible mark	11	8	16	5
Learner's mark				
Moderated mark				

Possible total	40
Learner's total	
Moderated total	

TOM NEWBY SCHOOL