



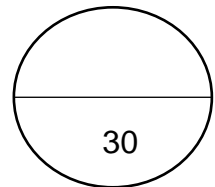
TOM NEWBY SCHOOL
TERM 4 FORMAL ASSESSMENT



Subject	PSW	Examiner	Ms M Mpesu
Date	November 2022	Total marks	30
Grade	4	Duration	1 HOUR
		Moderator	Mrs M Steyn
Instructions	1. Read each question carefully before answering. 2. Answer all questions neatly.		

This assessment has been compiled using notes and information contained in the Tom Newby School resource material. The marking memorandum has been compiled accordingly. While alternative responses will be given due acknowledgement, the official memorandum will be considered a priority document to ensure uniformity of marking.

Name:	Surname:	Class:
-------	----------	--------



Section A (15)

Question 1

[5]

Answer True or False.

1.1 Your religion is part of your culture. (1)

1.2 Almost all religions believe in life after death. (1)


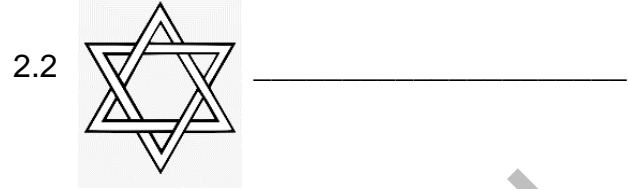

1.3 South Africa is called a rainbow nation because of the colours on its flag. (1)

1.4 Menu and recipe mean the same thing. (1)

1.5 Ingredients are substances that you need to prepare a dish. (1)

Question 2**[5]**

Name the religion for each of the following religious symbols

**Question 3****[5]**

Use the following words to complete the sentences below.

Imam	African	Church	Mosque	Pujari
------	---------	--------	--------	--------

3.1 Christians worship in a _____ and Muslims worship in a _____ (2)

3.2 A Hindu temple priest is called a _____ and an Islamic priest is called an _____ (2)

3.3 The _____ religious leaders are thought to be able to speak to their ancestors. (1)

TOTAL SECTION A: 15

Section B (15)

Question 4 **[5]**

Drowning can happen when you least expect it. Give two tips for water safety at home and two tips for water safety at the swimming pool (do not give same tips in each section).

Home: (2)

4.1 _____

4.2 _____

Swimming pool: (2)

4.3 _____

4.4 _____

4.5 What is the most important lesson to learn about water/swimming? (1)

Question 5 **[5]**

Use your own words to answer the following questions.

5.1 What is the danger of swimming in murky water? (1)

5.2 Why should swimmers wear foot protection when swimming in a dam or river? (1)

5.3 Why is it important to swim when and where a lifeguard is on duty at the beach? (1)

5.4 Why is it important never to stand with your back towards the water on a beach? (1)

5.5 Give a reason why it is not safe to help somebody who is in trouble in water if you cannot swim. (1)

Question 6

[5]

A pedestrian is anybody who walks along streets or roads

Listed below, are some safety rules for pedestrians.

1. When crossing the road, do so at safe places whenever possible: pedestrian crossings, traffic lights or scholar patrol areas. Always check that it is safe to cross the road, even at these safe areas.



2. If you are not able to find a pedestrian crossing, traffic light or scholar patrol area then check carefully for traffic before you cross. Look right, then left and then right again to check the traffic. It is important to remember that cars travel more quickly than you think they do so don't take chances. Walk quickly across the road when you are sure it is safe. If you run, you might stumble and fall and be unable to get up before a car reaches you. Make certain that you can cross the entire road – it is not a good idea to cross halfway and then wait on the middle line because you will have cars travelling on either side of you until you can cross to the other side. The wind created by cars travelling quickly can blow you off your feet and you might fall in front of oncoming cars.

3. Always walk on the pavement, if there is one. If there is no pavement and you have no have no choice but to walk on the road, make sure you are walking on the side of the road that has you facing the oncoming traffic – this helps you to see oncoming cars and get yourself out of the way if you need to.

6.1 What is a pedestrian? (1)

6.2 Name one safe place you can use when crossing the road. (1)

6.3 What are dangers of running while crossing the road? (1)

6.4 Always walk on the _____ (1)

6.5 If there is no pavement on the side of the road then you walk on the side facing the _____ (1)

TOTAL SECTION B: 15

GRAND TOTAL : 30



Grade 4 Personal and Social Well Being
TERM 4 FORMAL ASSESSMENT
Performance Analysis

(For teachers use only)

Name and Surname: _____

Grade 4: _____

Question	SECTION A			SECTION B			TOTAL
	1	2	3	4	5	6	
Possible mark	5	5	5	5	5	5	30
Learner's actual mark							
Moderated Mark							