



TOM NEWBY SCHOOL TEST



Subject	Personal and Social Well Being	Examiner	Mrs C Theron
Date	November 2021	Total marks	30
Grade	4	Duration	1 hour
		Moderator	Ms Botha
Special instructions/Equipment		Answer on the lines provided.	
<p>This assessment has been compiled using notes and information contained in the Tom Newby School resource material. The marking memorandum has been compiled accordingly. While alternative responses will be given due acknowledgement, the official memorandum will be considered a priority document to ensure uniformity of marking.</p>			

Name:	Surname:	Class:
--------------	-----------------	---------------

Instructions

1. Write your name, surname and class on the test sheet provided.
2. Read each question carefully before answering.
3. Follow instructions.
4. Check your answers before handing your paper in.
5. Use your common sense even if you cannot remember what is in your Life Skills notes.

SECTION A [15 MARKS]

QUESTION 1: True or False

[5]

If the answer is False, then write the correct statement.

- 1.1 If you read "Walkie Talkies" on a traditional South African menu, they are talking about a communication device. (1)

- 1.2 Most cultures have moral stories that teach people in that culture how to live in a good and meaningful way. (1)

- 1.3 "Melktert" is a pudding made, originally, in the Zulu culture. (1)









1.4 The Jewish and Buddhist religions, both have stars as their symbols. (1)



1.5 Most African Traditional Religion ceremonies take place outside, in nature. (1)

QUESTION 2: Religions

[5]

Complete the table below. The answers need to be filled in the answer grid provided.

Symbol	Place of worship	Name of religion	Name of leader
	Church	2.1	Minister/Reverend 
	Synagogue	Judaism	2.2 
	2.3	Islam	Imam 
	2.4	Buddhism	Monk 

	Mandirs	2.5	Pujari 
---	---------	-----	---

Answer grid

2.1.	
2.2.	
2.3.	
2.4.	
2.5.	

QUESTION 3:

[5]

Complete the sentences by selecting the most correct answer from the words in the word box. Write your answers in the answer grid provided.

virus, colds and flu, cure, parasites, hugging, open sores, mosquito bites, bacterial

HIV is a 3.1 for which there is no 3.2. HIV can enter your body through cuts or 3.3. You cannot get HIV from 3.4 or 3.5.

Answer grid

3.1.	
3.2.	
3.3.	
3.4.	
3.5.	

Total Section A: 15

SECTION B [15 MARKS]

QUESTION 4:

Describe 2 ways in which swimming in a pool differs from swimming in the sea. [2]


4.1. _____
 _____ (1)

4.2. _____
_____ (1)

QUESTION 5: Water Safety

[4]

Look at the pictures. Explain why each situation is unsafe. Describe what should be done to make it safe. Write your answers on the lines provided.



5.1. _____

_____ (2)

5.2. _____

_____ (2)

QUESTION 7: HIV and Aids**[4]**

Read each of the following scenarios. Answer the questions in full sentences.

7.1. David has AIDS. He is the best soccer player in the school, but his classmates are too afraid to play with him. Should they be afraid to play with David? Give a reason for your answer. (2)

7.2. Sharene and Martha are at a camp. Sharene has left her toothbrush at home. she is HIV positive. She asks Martha if she can borrow her toothbrush. (2)

7.2.1. What should Martha do? _____

7.2.2. Why? _____

Total Section B: 15

Grand total: 30

TOM NEWBY SCHOOL

