



TOM NEWBY SCHOOL

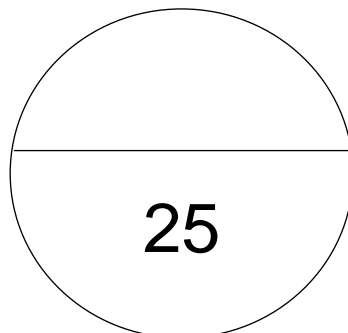
Test



Subject	Geography	Examiner	Miss Miller
Date	June 2022	Total marks	25 marks
Grade	4	Duration	1 hour
		Moderator	Mrs Steyn
Special instructions/ Equipment	None		
This assessment has been compiled using notes and information contained in the Tom Newby School resource material. The marking memorandum has been compiled accordingly. While alternative responses will be given due acknowledgement, the official memorandum will be considered a priority document to ensure uniformity of marking.			
Name:	Surname:	Class:	

Instructions:

- This paper consists of **FOUR** questions.
- There are a total of **EIGHT** pages.
- Section A: Settlements.
- Section B: Mapwork.
- Read the questions carefully before answering.
- Take note of the mark allocation and answer accordingly.
- Work neatly.
- Think carefully.
- Take a deep breath, relax and good luck!



Section A:

Settlements

[10]

Question 1:**[10]**

Complete the following sentences:

(3)

1.1 Urban areas usually have tall buildings made from cement and bricks while rural building are usually _____

1.2 People who work in rural areas normally wear old working clothes while people who work in urban areas usually wear _____

1.3 Some advantages of working in an urban environment are that there are many jobs, lots of entertainment and good hospitals. One advantage of living in a rural area is _____

1.4 Use full sentences to explain each of the following terms:

1.4.1 Employer

(1)

1.4.2 Farm

(1)

1.4.3 Footpath

(1)

1.5 List **two** basic needs that people have. For each basic need that you have chosen, explain why it is so important.

1.5.1 Need _____

(2)

Explanation:

1.5.2 Need _____

(2)

Explanation:

Section B:

Mapwork

[15]

Question 2:**[6]**

2.1 Which South African province is...

2.1.1 the biggest?

(1)

2.1.2 the smallest?

(1)

2.2.1 What is an **enclave**?

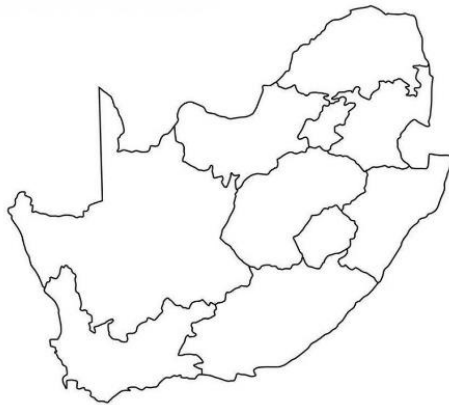
(1)

2.2.2 Give ONE example of an enclave in South Africa.

(1)

2.3 Colour in the province you live in.

(1)






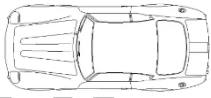




2.4 Draw the symbol that is used to show the location of a zoo on a map.

(1)



Question 3:**[4]**

Match the plan view in column B with the side view in Column A. Fill in the correct letter in the table provided below.

	Column A: Side view		Column B: Plan view
3.1		A	
3.2		B	
3.3		C	
3.4		D	

Answer Grid:

(4)

3.1 _____	3.2 _____	3.3 _____	3.4 _____
-----------	-----------	-----------	-----------

Question 4:**[5]**

Minenhle has to walk from her house to the comic bookstore. Her friend has drawn her the map below, but she does not understand it. Describe the route that Minenhle must use and remember to include at least 2 landmarks.

Use the rubric below as a guideline.

Level	Description	Marks
1	Uses evidence partially with little to no understanding with partial or no relevance to topic.	0-1
2	Uses evidence in a basic understanding to a great extent to the topic with no further explanation.	2-3
3	Uses sufficient and relevant evidence effectively which shows great understanding of the topic given	4-5

The map features several streets: Sixth street, Uno street, Caddy street, Unicorn street, Spark street, Picanto street, Juliette street, Romeo street, and Rainbow road. Landmarks include a red 'X' (Minenhle), green trees (Big tree), a red book with stars (Comic bookstore), a blue dam, shopping bags (Shop), and a stack of books (School). A legend on the right lists these symbols and their corresponding names.

TOM NEWBY

Grade 4 Geography Test

June 2022

Performance analysis

Name: _____ Class: _____

For teacher use only:

Question	1	2	3	4
Possible mark	10	6	4	5
Learner's mark				
Moderated mark				

Possible total	25
Learner's total	
Moderated total	